


A. LINTS

# MATEMAATIKA TÖÖVIHIK

1. KLASSILE

1. VIHIK



KIRJASTUS „VALGUS“

#K11

74673

A-29947

Kirjastuse kirjanduslik v. K. 29947  
A. LINTS

# MATEMAATIKA TÖÖVIHIK

## I KLASSILE

1. VIHIK

2. trükk

KIRJASTUS „VALGUS“  
TALLINN 1969

Kunstiliselt kujundanud ja illustreerinud V. Kotkas

MATEMAATIKA TOOVIIK

2

Tartu Riikliku Ülikooli  
Raamatukogu

74673

ARHIIVKOGU




Альфред Линтс. РАБОЧАЯ ТЕТРАДЬ ПО МАТЕМАТИКЕ ДЛЯ I КЛАССА. 1-я тетрадь. Издание 2-е. На эстонском языке. Художественное оформление и иллюстрации В. Коткас. Издательство «Валгус». Таллин, Пярнуское шоссе, 10.

Toimetaja I. Pikas. Kunstiline toimetaja H. Keigo. Tehniline toimetaja A. Muna. Korrektorid H. Kull ja M. Pail. Laduda antud 28. I 1969. Trükkida antud 9. VI 1969. Paber 70×84/16. Trükipoognaid 5,5+ lisad. Tingtrükipoognaid 6,5. Arvestuspoognaid 5,18. Trükiarv 30 000. Tellimuse nr. 783. Hans Heidemanni nim. Trükkikoda. Tartu. Ülikooli 17/19. 11.

Hind 16 kop.




KIRJASTUS VALGUS  
TALLINN 1969

HULGAD.





JOONISTA SIIA MÕNI HULK.

TÕMBA IGALE HULGALE JOON ÜMBER.


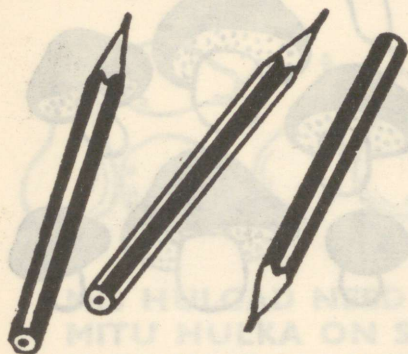
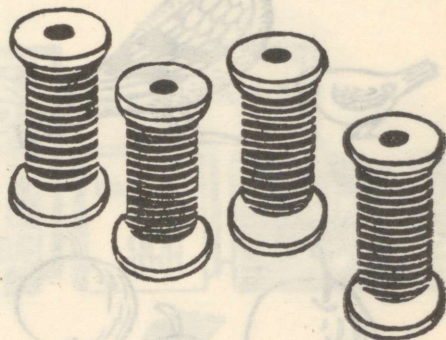
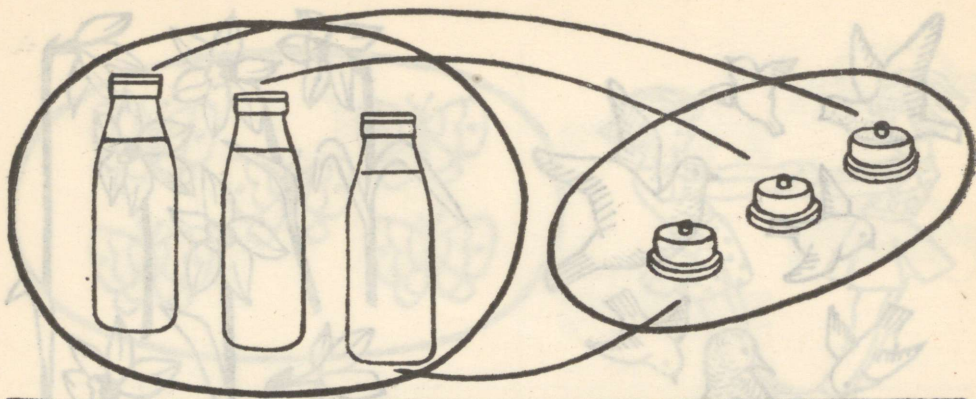


MIS HULGAD NEED ON?  
MITU HULKA ON SELLEL LEHEKÜLJEL?  
MITU ESET ON IGAS HULGAS?

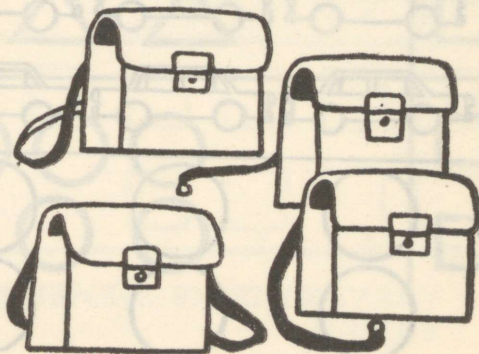





MIS HULGAD NEED ON?

# KAS ON NIISAMA PALJU?


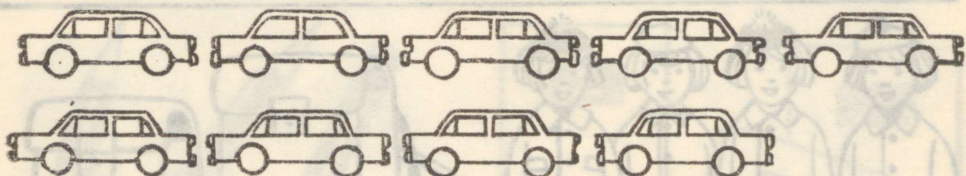
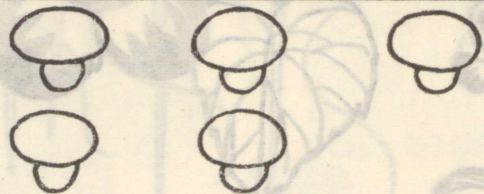
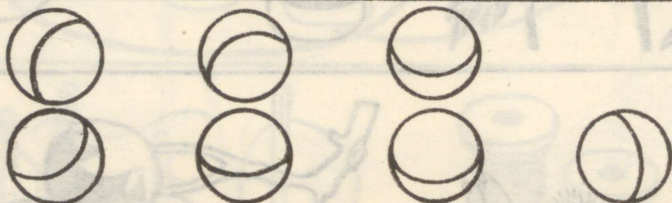


KUS ON ROHKEM, KUS VÄHEM?




KUMMAS REAS ON ESEMEID ROHKEM?

VÄRVI SELLES REAS ESEMED PUNASEKS.

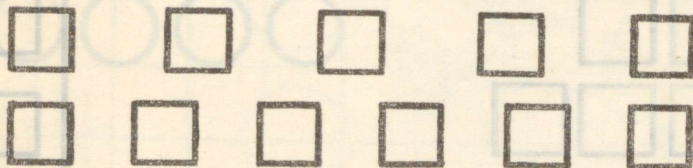


TEE MÄRK X SELLESSE RITTA, KUS ESEMEID ON ROHKEM.

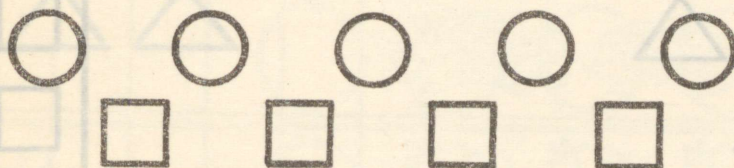
VÄHEM




<input type="checkbox"/>
<input type="checkbox"/>




<input type="checkbox"/>
<input type="checkbox"/>



<input type="checkbox"/>
<input type="checkbox"/>



<input type="checkbox"/>
<input type="checkbox"/>




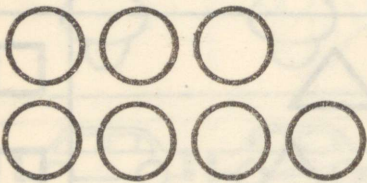
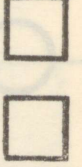

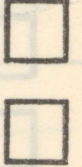
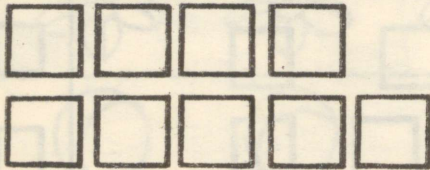




<input type="checkbox"/>
<input type="checkbox"/>

VÄRVI!


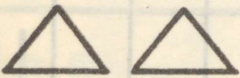
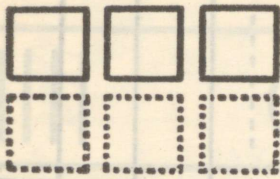
VÄHEM

TEE MÄRK × SELLESSE RITTA, KUS ESEMEID ON VÄHEM.






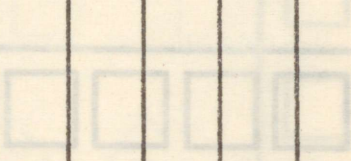



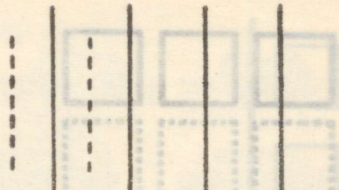
VÄRVI SINISEKS ESEMED SELLES REAS, KUS NEID ON VÄHEM.

JOONISTA TEISE RITTA NIISAMA PALJU.



VÄRVII!

TÕMBA NIISAMA PALJU KRIIPSE.







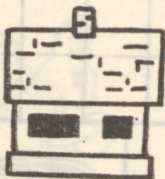
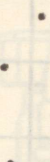










VÄRVI IGAS REAS NIISAMA PALJU RINGE, KUI SELLES ON KRIIPSE.

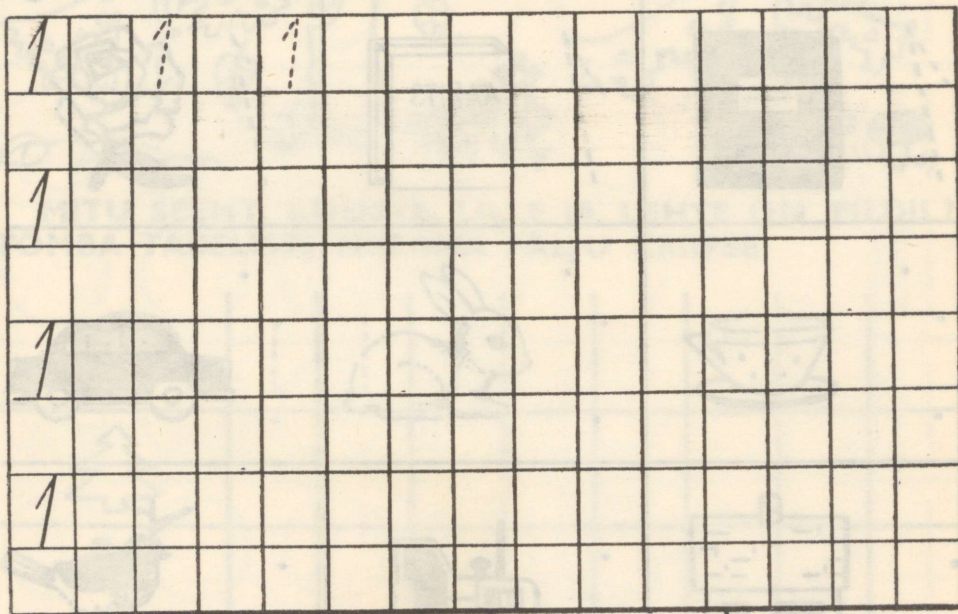


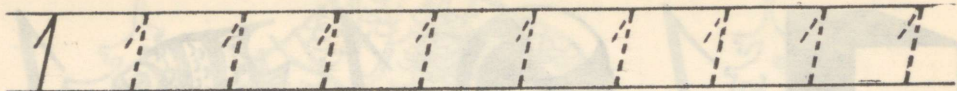
	○	○	○	○	○
	○	○	○	○	○
	○	○	○	○	○
	○	○	○	○	○
	○	○	○	○	○
	○	○	○	○	○
	○	○	○	○	○
	○	○	○	○	○





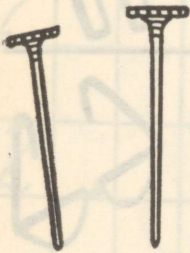

MITU SEENT, KUUSKE, LILLE JA LEHTE ON PILDIL?  
TÕMBA TABELISSE NIISAMA PALJU KRIIPSE.


	---	---	---				
							
							
							






MIDA ON NENDEL PILTIDEL ÜKS? KIRJUTA SINNA 1.





2




2

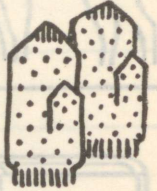
2



2




2



2



2




2



2




2



2



-----



-----



-----




2 2 2 2 2 2 2 2 2 2

2 . . . . .


2 . . . . .

PAAR

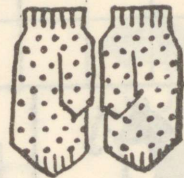

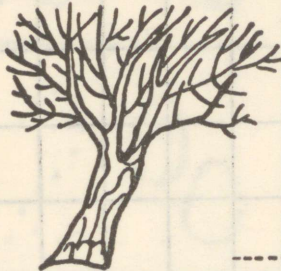


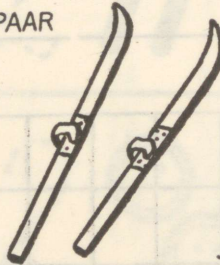
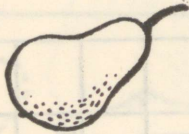
2	2	2																	
2																			
2																			
2																			



MITU ESET ON IGAL PILDIL?



PAAR




PAAR




VÄRVI IGAS REAS NÕUTAV ARV ÕUNU.


2



1




1+1



2






3



3

3



3




3



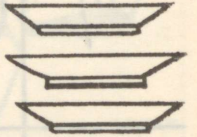
3



3



3




3




3



3



3



3



3





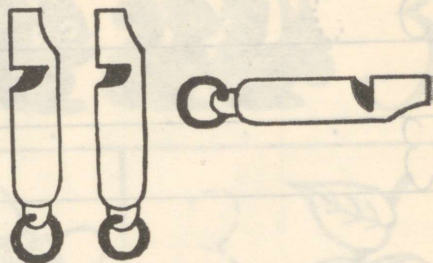






KIRJUTA, MITU ESET ON IGAS HULGAS.



3



MITU ESET ON IGAS HULGAS?



1

3

2

3











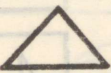









1

2

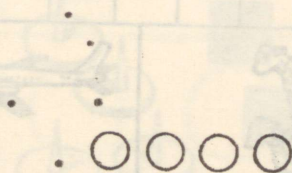
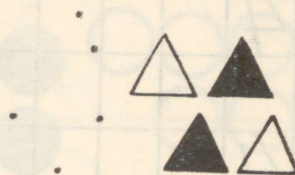

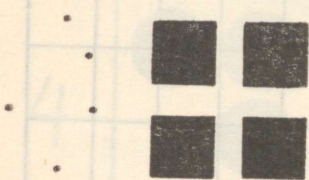

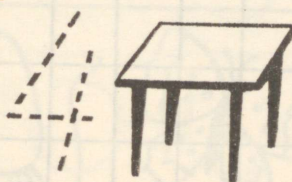




3

2

JOONISTA KUJUNDEID JUURDE, NII ET NEID OLEKS  
MÕLEMAS REAS ÜHEPALJU.

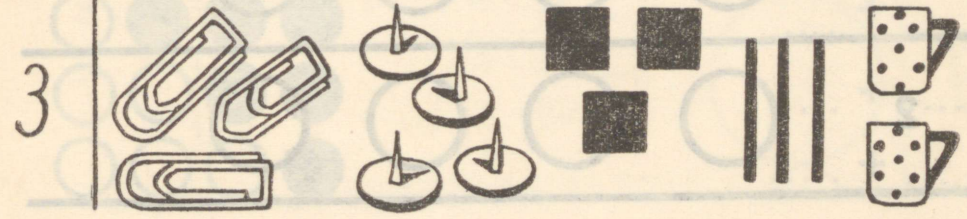
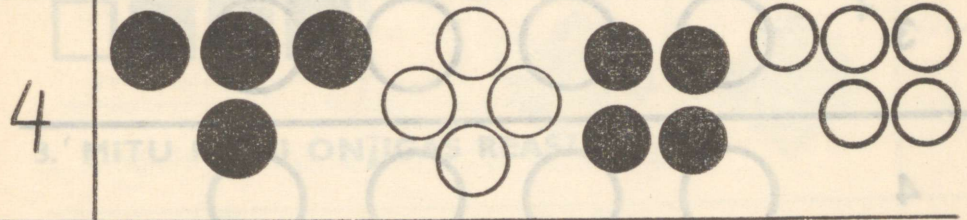
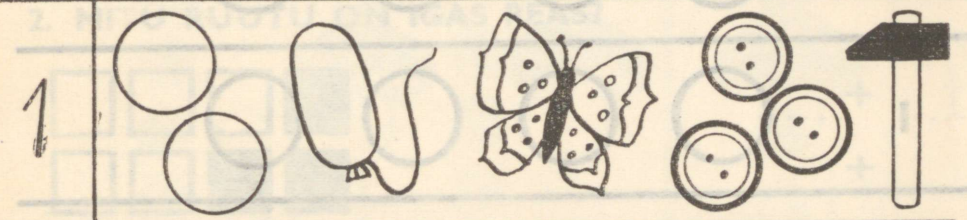
	
	
	
	
	
	
	
	
	
	

KIRJUTA NÜÜD, MITU KUJUNDIT ON IGAS REAS.





TÕMBA IGAS REAS JOON ÜMBER SELLELE HULGALE, KUS ON NÕUTAV ARV ESEMEID.




VÄRVI IGAS REAS NÕUTAV ARV RINGE.


3




2



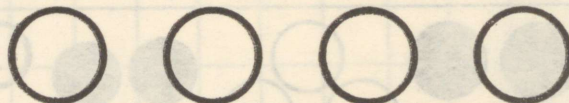
4




1



3




4



2




1. KIRJUTA, MITU LILLE ON IGAS REAS.




4  
 .....  
 3 + 1  
 .....  
 +  
 .....  
 +  
 .....

2. MITU RUUTU ON IGAS REAS?





..... + .....  
 +  
 ..... + .....  
 +  
 ..... + .....

3. MITU RINGI ON IGAS REAS?




..... + .....  
 +  
 ..... + .....  
 +  
 ..... + .....

4





4





4



4



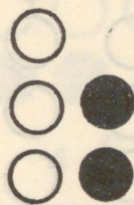





4



ON SUUREM KUI.

1. KIRJUTA PUUDUVAD ARVUD JA RUUDU SISSE MÄRK >.

 <p>4 &gt; 3</p>	 <p>□</p>	 <p>3 &gt; 2</p>
 <p>□</p>	 <p>□</p>	 <p>□</p>

2. KIRJUTA IGASSE RUUTU SOBIV ARV.

2 > □  
3 > □  
3 > □

4 > □  
4 > □  
4 > □

LOE, MIDA SA KIRJUTASID.

1. ON VÄIKSEM KUI.


KIRJUTA PUUDUVAD ARVUD JA RUUDU SISSE MÄRK <.


2. KIRJUTA IGASSE RUUTU SOBIV ARV.


3 <	<input type="checkbox"/>	<input type="checkbox"/> < 1	<input type="checkbox"/>
2 <	<input type="checkbox"/>	<input type="checkbox"/> < 1	<input type="checkbox"/>
2 <	<input type="checkbox"/>	<input type="checkbox"/> < 1	<input type="checkbox"/>

LOE, MIDA SA KIRJUTASID.

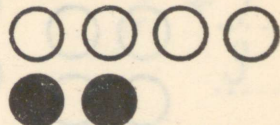
VÖRDLE. KIRJUTA IGASSE RUUTU PUUDUV MÄRK,  
ET LAUSE OLEKS ÕIGE.




4  3




2  4




4  2




.....  .....




.....  .....




.....  .....



.....  .....



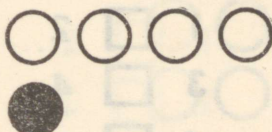
.....  .....




.....  .....



.....  .....



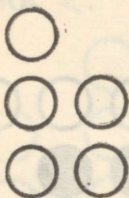
.....  .....





.....  .....

LOE, MIDA SA KIRJUTASID.


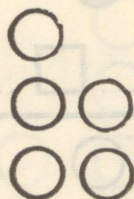

1. VÖRDLE.



3 > 2



2. VÖRDLE.



3. VÖRDLE. KIRJUTA IGASSE RUUTU PUUDUV MÄRK.

3  2

4  2

1  3

2  3

1  2

3  4

4  1

2  1

3  1

4  3

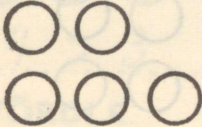
1  4


2  4


LOE, MIDA SA KIRJUTASID.


VÖRDLE.


JOONISTA PUUDUV RING.  
VÖRDLE NÜÜD UUESTI.


1.   $2 < 3$


  $2 + 1 = 3$

2.   $\dots < \dots$

  $\dots + \dots = \dots$

3.   $\dots < \dots$

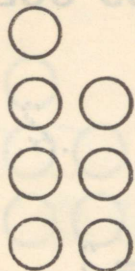
  $\dots + \dots = \dots$

4.   $\dots < \dots$


  $\dots + \dots = \dots$

LOE, MIDA SA KIRJUTASID.

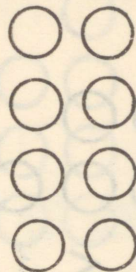
1. VÖRDLE.



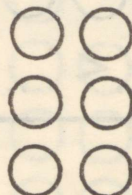
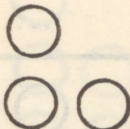
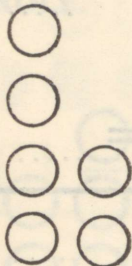
4  3



3  4



4  4



3. KIRJUTA RUUDU SISSE PUUDUV MÄRK (<, >, =), ET LAUSE OLEKS ÕIGE.


1  1  
2  3  
3  2  
4  1

1  2  
2  2  
3  1  
4  2

1  3  
2  1  
3  3  
4  3


LOE, MIDA SA KIRJUTASID.

1. VÖRDLE.

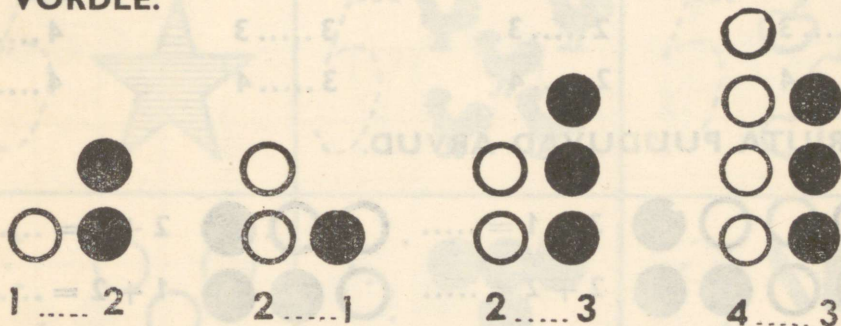


4 > 3

2. VÖRDLE.



3. VÖRDLE.



1 = 2

2 > 1

2 < 3

4 > 3

4. KIRJUTA RUUDU SISSE ÕIGE MÄRK (>, <, =).

1  4

4  4

2  4

4  1

2  3

1  3

3  2

1  1

3  2









2  3

3  2

4  1

LOE, MIDA SA KIRJUTASID.

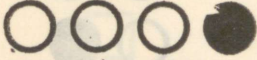

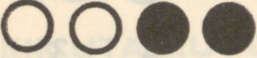



1. VÖRDLE. KIRJUTA IGA JOONISE JÄRGI KAKS VÖR-  
RATUST.

	$4 > 2$		.....
	$2 < 4$		.....
			.....
			.....






2. VÖRDLE.

$1 = 1$	$2 \dots 1$	$3 \dots 1$	$4 \dots 1$
$1 \dots 2$	$2 \dots 2$	$3 \dots 2$	$4 \dots 2$
$1 \dots 3$	$2 \dots 3$	$3 \dots 3$	$4 \dots 3$
$1 \dots 4$	$2 \dots 4$	$3 \dots 4$	$4 \dots 4$

3. KIRJUTA PUUDUVAD ARVUD.


	$3 + 1 = \dots$		$2 + 1 = \dots$
	$2 + 2 = \dots$		$1 + 2 = \dots$
	$1 + 3 = \dots$		$1 + 1 = \dots$

4. TÄIDA TÜHJAD RUUDUD.




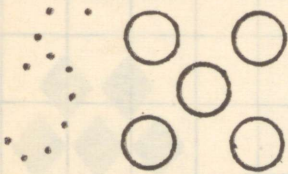



								
.....	2	.....	.....	.....	.....	3	4	2



5



5



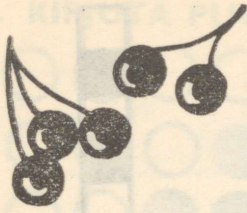
5 5 5 5 5 5 5 5 5 5

5 5 5 5 5 5 5 5 5 5

5 . . . . .

5 . . . . .

5	5																		
5																			
2																			
3																			
5																			



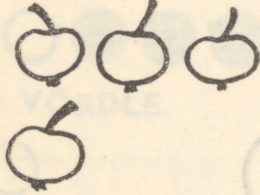
-----



-----




-----




-----




-----



-----




-----




-----



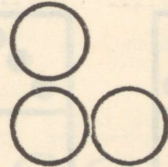
-----



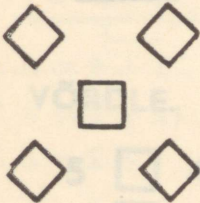
-----




-----



-----



-----



-----



-----

# 1. MITU RUUTU?




1



2



.....




.....




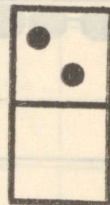
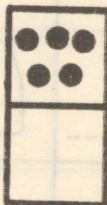


.....

# 2. MITU RINGI?




# 3. MITU TÄPPI?



# 4. KIRJUTA PUUDUVAD ARVUD.



# 1. KIRJUTA PUUDUVAD ARVUD.



$4 + 1 = \dots$

$5 = \dots + \dots$

$\dots + \dots = 5$

$5 = \dots + \dots$


$\dots + \dots = 5$

$5 = \dots + \dots$


$\dots + \dots = 5$

$5 = \dots + \dots$

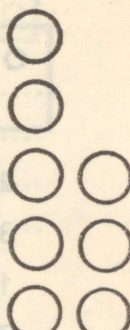
# 2. VÖRDLE.



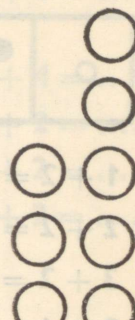
$5 > \dots$



$4 < \dots$




$\square \dots$



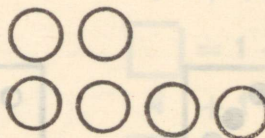
$\square \dots$

# 3. VÖRDLE.



$5 \dots 2$

$2 \dots 5$



$2 \dots 4$

$4 \dots 2$

# 4. VÖRDLE.

$5 \square 4$

$4 \square 5$

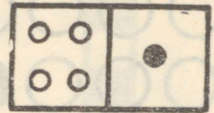
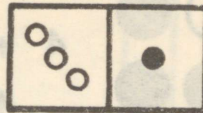
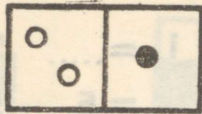
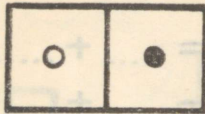
$5 \square 3$

$3 \square 5$

$5 \square 5$

$5 \square 2$

1.



$3 + 1 = \dots$

$1 + 1 = \dots$

$2 + 1 = \dots$

$2 + 1 = \dots$

$4 + 1 = \dots$

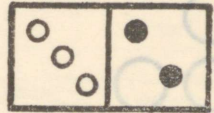
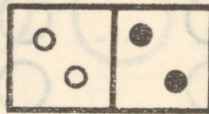
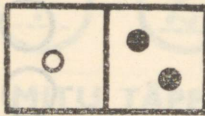
$3 + 1 = \dots$

$1 + 1 = \dots$

$3 + 1 = \dots$

$4 + 1 = \dots$

2.



$1 + 2 = \dots$

$2 + 1 = \dots$

$4 + 1 = \dots$

$2 + 2 = \dots$

$3 + 1 = \dots$

$1 + 1 = \dots$

$3 + 2 = \dots$

$1 + 2 = \dots$

$2 + 2 = \dots$

3.

$2 + 1 = \dots$

$3 + 1 = \dots$

$1 + 2 = \dots$

$3 + 2 = \dots$

$3 + 2 = \dots$

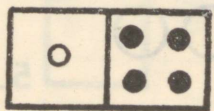
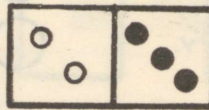
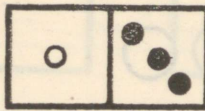
$4 + 1 = \dots$

$1 + 2 = \dots$

$2 + 1 = \dots$

$2 + 2 = \dots$

4.



$1 + 3 = \dots$

$2 + 3 = \dots$

$1 + 4 = \dots$

$3 + 1 = \dots$

$1 + 3 = \dots$

$2 + 2 = \dots$

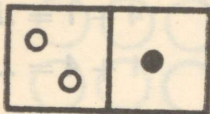
$2 + 3 = \dots$

$3 + 2 = \dots$

$1 + 2 = \dots$

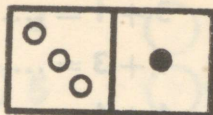
**LOE, MIDA SA KIRJUTASID.**

1.



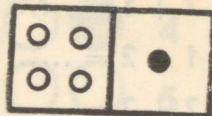
$$2 + 1 = \dots$$

$$1 + 2 = \dots$$



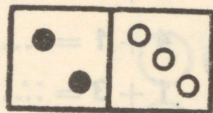
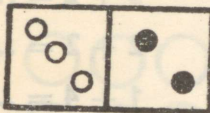
$$3 + 1 = \dots$$

$$1 + 3 = \dots$$



$$4 + 1 = \dots$$

$$1 + 4 = \dots$$



$$3 + 2 = \dots$$

$$2 + 3 = \dots$$

2.  $1 + 3 = \dots$

$$2 + 3 = \dots$$

$$1 + 4 = \dots$$

$$3 + 1 = \dots$$

$$2 + 3 = \dots$$

$$1 + 3 = \dots$$

$$3 + 2 = \dots$$

$$2 + 2 = \dots$$

$$1 + 4 = \dots$$

$$1 + 2 = \dots$$

$$2 + 2 = \dots$$

$$3 + 2 = \dots$$

3.



$$3 + 2 = \square$$

$$\square = 3 + 2$$

$$2 + 3 = \square$$

$$\square = 2 + 3$$

$$1 + 4 = \square$$

$$\square = 1 + 4$$

$$4 + 1 = \square$$

$$\square = 4 + 1$$

4.  $4 + 1 = \dots$

$$1 + 4 = \dots$$

$$3 + 2 = \dots$$

$$2 + 3 = \dots$$

$$4 + \dots = 5$$

$$1 + \dots = 5$$

$$3 + \dots = 5$$

$$2 + \dots = 5$$

$$\dots + 1 = 5$$

$$\dots + 4 = 5$$

$$\dots + 2 = 5$$

$$\dots + 3 = 5$$

### 1. LIIDA.

$2 + 1 = \dots$

$3 + 1 = \dots$

$4 + 1 = \dots$

$1 + 2 = \dots$

$1 + 3 = \dots$

$1 + 4 = \dots$

$2 + 2 = \dots$

$1 + 1 = \dots$

$3 + 2 = \dots$

### 2. LIIDA.

$1 + 3 = \dots$

$2 + 3 = \dots$

$3 + 2 = \dots$

$1 + 4 = \dots$

$4 + 1 = \dots$

$2 + 2 = \dots$

$3 + 1 = \dots$

$1 + 3 = \dots$

$1 + 4 = \dots$

### 3. VÖRDLE.

$1 = 1$

$1 \dots 2$

$1 \dots 3$

$1 \dots 4$

$2 > 1$

$2 \dots 2$

$2 \dots 3$

$2 \dots 4$

$3 \dots 1$

$3 \dots 2$

$3 \dots 3$

$3 \dots 4$

$4 \dots 1$

$4 \dots 2$

$4 \dots 3$

$4 \dots 4$

### 4. LIIDA.

$2 + 1 = \dots$

$3 + 1 = \dots$

$4 + 1 = \dots$

$1 + 2 = \dots$

$1 + 3 = \dots$

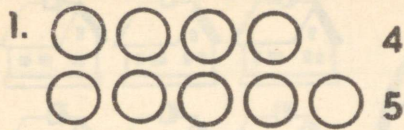
$1 + 4 = \dots$

$2 + 3 = \dots$

$3 + 2 = \dots$

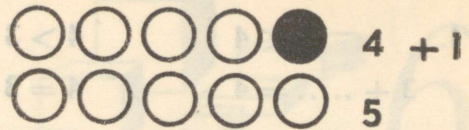
$2 + 2 = \dots$

VÖRDLE. TÄIENDA VÖRRATUS VÖRDUSEKS!




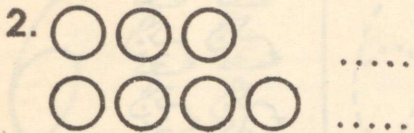
$4 < 5$

$5 > 4$





$4 + \dots = 5$

$5 = 4 + \dots$



$= 4$

$4 = \dots$





5  4

4  5

$5 = \dots$

$= \dots$



.....

.....

.....

.....

#### 4. KIRJUTA IGA VÖRRATUSE JÄRGI VÖRDUS.

1.  $3 < 4$        $4 > 3$   
 $3 + \dots = 4$        $4 = 3 + \dots$

2.  $4 < 5$        $5 > 4$   
 $\dots = 5$        $5 = \dots$

---

3.  $2 < 3$        $1 < 2$   
 $\dots = 3$        $\dots = \dots$


4.  $2 > 1$        $4 > 3$   
 $2 = \dots$        $4 = \dots$

---

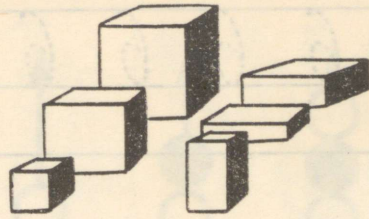
5.  $3 > 2$        $2 < 3$   
 $3 = \dots$        $\dots = 3$

6.  $4 > 3$        $3 < 4$   
 $4 = \dots$        $\dots = 4$

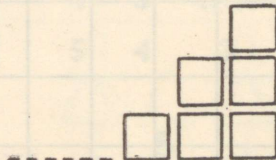

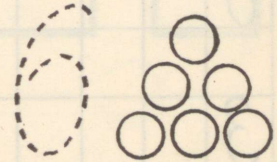

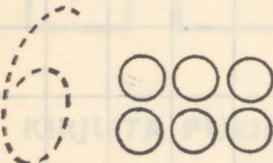


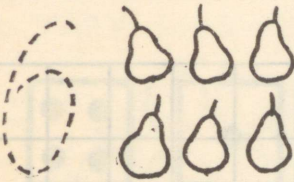


---



6



6



6 6 6 6 6 6 6 6 6 6

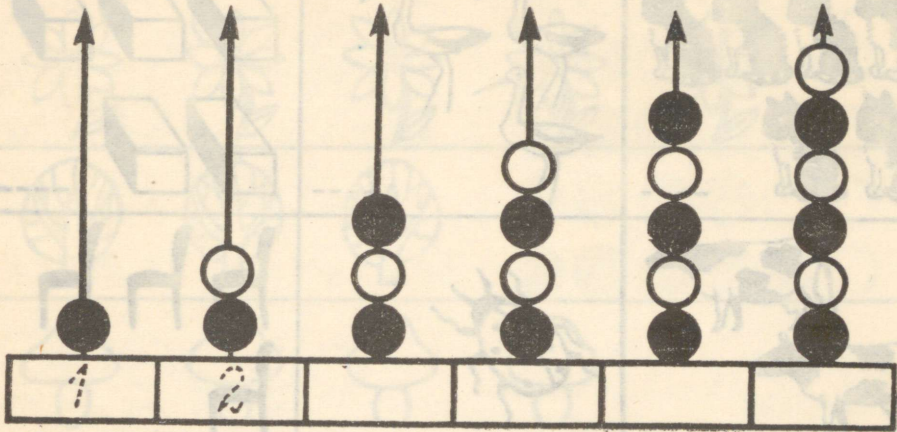
6

6

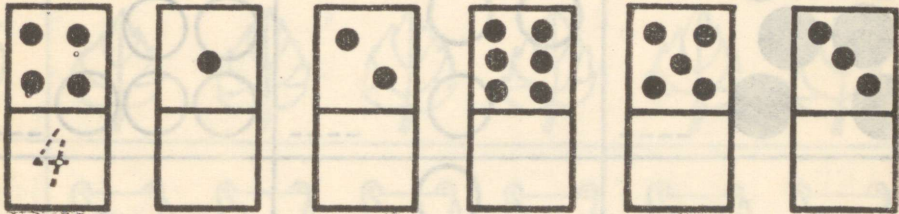
6

6	6																		
6																			
3																			
5																			
2																			

1.




2.




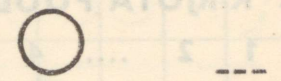
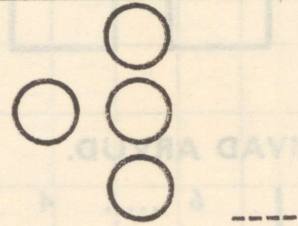
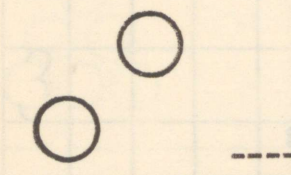
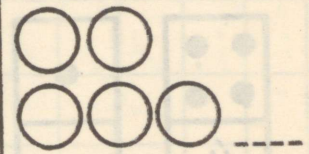
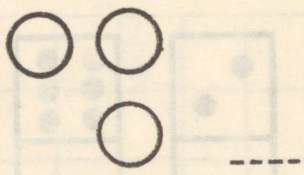


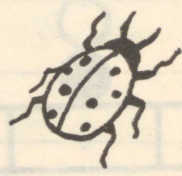

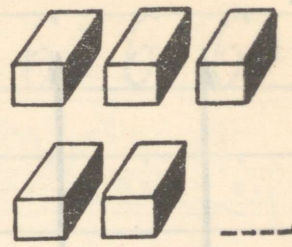




3. KIRJUTA PUUDUVAD ARVUD.


1	2	.....	4		6	.....	4	3
3	.....	5	6		4	3	.....	1
2	3	.....	5		5	4	3	.....

4.






1. JOONISTA JUURDE NII PALJU, ET 6 TÄIS SAAB.



2. VÄRVI IGAS REAS NII PALJU, KUI NÕUTAKSE.


5



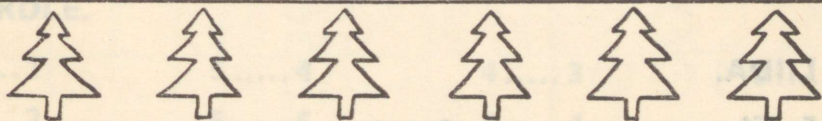
4



3




2



MITU ESET JÄI IGAS REAS VÄRVIMATA?

1.



$6 = 5 + \dots$

$6 = \dots + 5$

$6 = 4 + \dots$

$6 = \dots + 4$

$6 = 3 + \dots$

$6 = \dots + 3$

$6 = 2 + \dots$

$6 = \dots + 2$

$6 = 1 + \dots$

$6 = \dots + 1$

## 2. VÖRDLE.

$5 < 6$

$4 \dots 3$

$4 \dots 5$

$6 \dots 5$

$6 \dots 3$

$3 \dots 5$

$2 \dots 6$

$5 \dots 6$

$5 \dots 2$

$2 \dots 4$

$6 \dots 4$

$5 \dots 4$

$6 \dots 5$

$6 \dots 1$

$5 \dots 3$

$4 \dots 5$

## 3. LIIDA.

$4 + 1 = \dots$

$2 + 1 = \dots$

$5 + 1 = \dots$

$1 + 4 = \dots$

$1 + 2 = \dots$

$1 + 5 = \dots$

$3 + 1 = \dots$

$3 + 2 = \dots$

$4 + 2 = \dots$

$1 + 3 = \dots$

$2 + 3 = \dots$

$2 + 4 = \dots$

## 4. LIIDA.

$5 + 1 = \dots$

$2 + 4 = \dots$

$3 + 3 = \dots$

$1 + 5 = \dots$

$4 + 2 = \dots$

$2 + 3 = \dots$

# 1. VÖRDLE.




$6 > 4$

$4 < 6$

$6 = 4 + \dots$

$4 + \dots = 6$

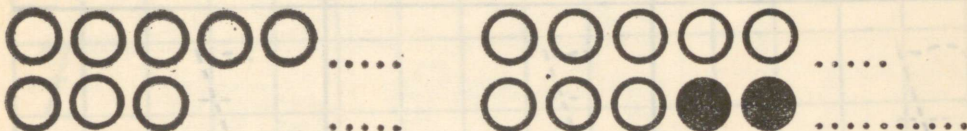


$6 \dots 5$

$5 \dots 6$

$6 = \dots + \dots$

$\dots + \dots = 6$



$\dots > \dots$

$\dots < \dots$

$5 = \dots + \dots$

$\dots + \dots = 5$

# 2. VÖRDLE.

$5 \dots 1$

$5 \dots 2$

$5 \dots 3$

$5 \dots 4$

$5 \dots 5$

$5 \dots 6$

$4 \dots 3$

$4 \dots 4$

$3 \dots 1$


$3 \dots 2$

$3 \dots 3$


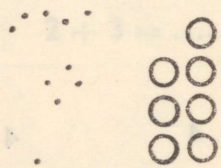
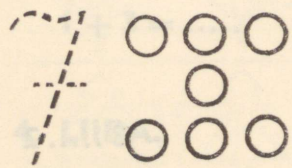

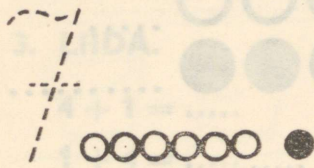

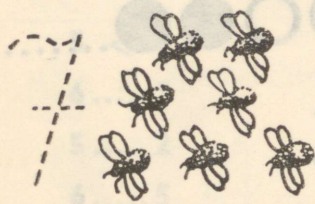
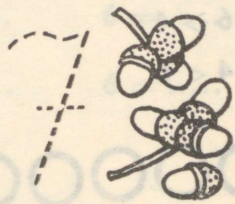
$2 \dots 1$



7



7



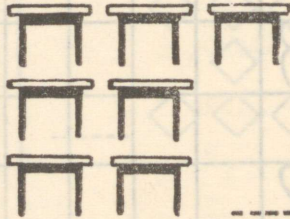



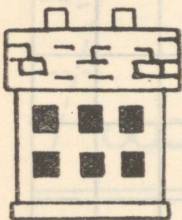

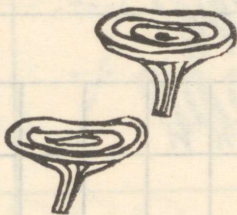





7 7 7 7 7 7 7 7 7 7

7 . . . . .


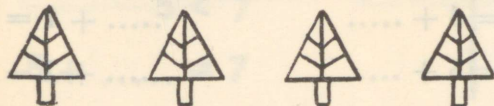
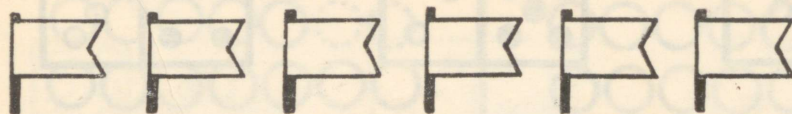
7

7


7	7																		
7																			
5																			
3																			
2																			



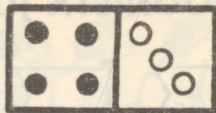

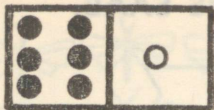
1. JOONISTA JUURDE NII PALJU, ET 7 TÄIS SAAB.



2. VÄRVI IGAS REAS NII PALJU, KUI NÕUTAKSE.



MITU ESET JÄI IGAS REAS VÄRVIMATA?



1.  $7 = 1 + \dots$

$7 = 2 + \dots$

$7 = 3 + \dots$

$7 = 4 + \dots$

$7 = 5 + \dots$

$7 = 6 + \dots$

$\dots + 1 = 7$

$\dots + 2 = 7$

$\dots + 3 = 7$

2.  $6 = 1 + \dots$

$6 = 2 + \dots$

$6 = 3 + \dots$

$6 = 4 + \dots$

$6 = 5 + \dots$

$6 = 2 + \dots$

$5 = 1 + \dots$

$5 = 2 + \dots$

$5 = 3 + \dots$

3.  $5 = 4 + \dots$

$4 = 3 + \dots$

$4 = 2 + \dots$

$4 = 1 + \dots$

$3 = 1 + \dots$

$3 = 2 + \dots$

$2 = 1 + \dots$

$6 = 1 + \dots$

$5 = 1 + \dots$

4.  $1 + 6 = \dots$

$6 + 1 = \dots$

$3 + 3 = \dots$

$2 + 5 = \dots$

$5 + 2 = \dots$


$2 + 2 = \dots$

$4 + 3 = \dots$

$3 + 4 = \dots$

$1 + 1 = \dots$


KIRJUTA VÖRRATUS JA SELLE JÄRGI 2 VÖRDUST.



$5 < 7$

$5 + \dots = 7$


$7 = 5 + \dots$



$7 > 6$

$7 = 6 + \dots$

$6 + \dots = 7$



$7 \dots 4$

$\dots = \dots$


$\dots = \dots$



$\dots < \dots$

$\dots = \dots$

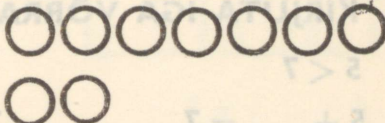
$\dots = \dots$



$\dots$

$\dots$


$\dots$



$\dots$

$\dots$


$\dots$



$\dots$

$\dots$

$\dots$

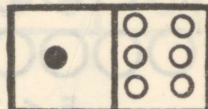
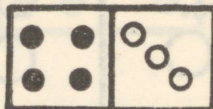
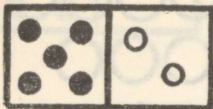


$\dots$

$\dots$

$\dots$

1. KOOSTA IGA JOONISE JÄRGI 2 VÖRDUST.



$5 + \dots = 7$

.....

.....

$\dots + 5 = 7$

.....

.....

2. ARVUTA.

$2 + 1 = \dots$

$1 + 1 = \dots$

$6 + 1 = \dots$

$3 + 1 = \dots$

$4 + 1 = \dots$

$5 + 1 = \dots$

$5 + 1 = \dots$

$3 + 1 = \dots$

$2 + 1 = \dots$

3. KIRJUTA IGA VÖRRATUSE JÄRGI 2 VÖRDUST.

$5 < 7$

$7 > 4$

$7 > 5$

$5 + \dots = 7$

$7 = 4 + \dots$

$7 = 5 + \dots$

$7 = 5 + \dots$

$4 + \dots = 7$

$5 + \dots = 7$

$4. 6 > 5$

$5 < 6$

$3 < 5$

$6 = 5 + \dots$

$5 + \dots = 6$


$3 + \dots = 5$

$5 + \dots = 6$

$6 = 5 + \dots$

$5 = 3 + \dots$

5. KIRJUTA PUUDUVAD ARVUD.



# 1. LAHUTAMINE.


1.



$$5 - 1 = \dots$$



$$4 - 1 = \dots$$



$$3 - 1 = \dots$$



$$5 - 2 = \dots$$



$$4 - 2 = \dots$$



$$3 - 2 = \dots$$

2.  $5 - 1 = \dots$        $5 - 2 = \dots$        $4 - 1 = \dots$

$$4 - 1 = \dots$$

$$4 - 2 = \dots$$

$$4 - 2 = \dots$$

$$3 - 1 = \dots$$

$$3 - 2 = \dots$$

$$2 - 1 = \dots$$

3.



$$5 - 3 = \dots$$



$$4 - 3 = \dots$$



$$5 - 4 = \dots$$

4.  $5 - 3 = \dots$

$$4 - 2 = \dots$$

$$2 - 1 = \dots$$

$$4 - 3 = \dots$$

$$4 - 1 = \dots$$

$$4 - 3 = \dots$$

$$4 - 2 = \dots$$

$$4 - 3 = \dots$$

$$3 - 2 = \dots$$

5.  $3 - 2 = \dots$

$$3 - 1 = \dots$$

$$4 - 1 = \dots$$

$$2 - 1 = \dots$$

$$4 - 1 = \dots$$

$$4 - 2 = \dots$$

$$4 - 2 = \dots$$

$$4 - 3 = \dots$$

$$4 - 3 = \dots$$

1. KOOSTA IGA JOONISE JÄRGI 2 VÄRMIKUNNI



$$4 + 1 = \dots$$

$$5 - 1 = \dots$$



$$3 + 2 = \dots$$

$$5 - 2 = \dots$$



$$2 + 3 = \dots$$

$$5 - 3 = \dots$$



$$3 + 1 = \dots$$

$$\dots - 1 = 3$$



$$2 + 2 = \dots$$


$$\dots - 2 = 2$$




$$1 + 3 = \dots$$

$$\dots - 3 = \dots$$


2. JOONISTA JUURDE PUUDUVAD TÄPID.




$$4 + \dots = 5$$



$$3 + \dots = 5$$



$$2 + \dots = 5$$



$$1 + \dots = 5$$

3. LEIA PUUDUVAD ARVUD.

$$4 + \dots = 5$$

$$3 + \dots = 5$$

$$5 - 1 = \dots$$

$$5 - 2 = \dots$$

$$2 + \dots = 5$$

$$\dots - 3 = 2$$

$$1 + 4 = \dots$$

$$5 - \dots = 1$$

1.



$1 + 5 = \dots$

$2 + 4 = \dots$

$3 + 3 = \dots$

$6 - 5 = \dots$

$6 - 4 = \dots$

$6 - 3 = \dots$

2.

$1 + 1 = \dots$

$3 + 1 = \dots$

$5 + 1 = \dots$

$2 - 1 = \dots$

$4 - 1 = \dots$

$6 - 1 = \dots$

$2 + 1 = \dots$

$4 + 1 = \dots$

$4 + 2 = \dots$

$3 - 1 = \dots$

$5 - 1 = \dots$

$6 - 2 = \dots$

3.

$2 + 4 = \dots$

$1 + 5 = \dots$

$2 + 3 = \dots$

$6 - 4 = \dots$

$6 - 5 = \dots$

$5 - 3 = \dots$

$5 + 1 = \dots$

$3 + 2 = \dots$


$1 + 4 = \dots$

$6 - 1 = \dots$

$5 - 2 = \dots$

$5 - 4 = \dots$

4.



$5 + 2 = \dots$

$4 + 3 = \dots$

$7 - 2 = \dots$

$7 - 3 = \dots$

$7 - 5 = \dots$

$7 - 4 = \dots$

5.

$6 + 1 = \dots$

$5 + 2 = \dots$

$4 + 3 = \dots$

$7 - 1 = \dots$

$7 - 2 = \dots$

$7 - 3 = \dots$

$1 + 6 = \dots$

$2 + 5 = \dots$

$3 + 4 = \dots$

$6 + 1 = \dots$

$5 + 2 = \dots$

$4 + 3 = \dots$

1. KOOSTA IGA JOONISE JÄRGI 2 VÕRDUST.



$3 + 1 = \dots$


.....

.....

$\dots - 1 = 3$

.....

.....



.....

.....

.....

.....

2.



$3 + 4 \dots$

.....

$\dots - 4 = \dots$

.....

3.  $5 + 2 = \dots$

$4 + 3 = \dots$

$1 + 6 = \dots$

$7 - 2 = \dots$

$7 - 3 = \dots$

$7 - 6 = \dots$

$2 + 5 = \dots$

$3 + 4 = \dots$

$6 + 1 = \dots$

$7 - 5 = \dots$

$7 - 4 = \dots$

$7 - 1 = \dots$

4.  $3 + \dots = 6$

$2 + \dots = 5$

$4 + \dots = 7$

$\dots + 4 = 5$

$\dots + 5 = 6$


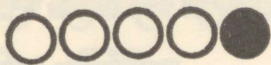
$\dots + 3 = 4$

$\dots + 4 = 5$

$1 + 6 = \dots$

1. KOOSTA IGA JOONISE JÄRGI 4 VÕRDUST.

1.



$4 + 1 = \dots$

$2 + 3 = \dots$

$1 + 4 = \dots$

$\dots = \dots$

$5 - 1 = \dots$

$5 - 3 = \dots$

$5 - 4 = \dots$

$\dots = \dots$

2.



$2 + 1 = \dots$

$\dots = \dots$

$\dots = \dots$

$\dots = \dots$

$\dots = \dots$

$\dots = \dots$

$\dots = \dots$

$\dots = \dots$

3.



$\dots = \dots$

$\dots = \dots$

$\dots = \dots$

$\dots = \dots$


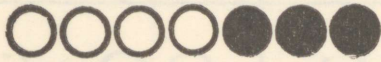
$\dots = \dots$

$\dots = \dots$

$\dots = \dots$

$\dots = \dots$

4.



$\dots = \dots$

$\dots = \dots$

$\dots = \dots$

$\dots = \dots$


$\dots = \dots$

$\dots = \dots$

$\dots = \dots$

$\dots = \dots$

1. VÕRDLE. KIRJUTA VÕRRATUSE JÄRGI LIITMISE JA LAHUTAMISE ABIL KAKS VÕRDUST.



$4 < 5$

$4 + 1 = 5$

$4 = 5 - 1$



$4 < 3$

$4 = 3 + \dots$

$4 - \dots = 3$

2. KIRJUTA VÕRRATUSE JÄRGI KAKS VÕRDUST.

$3 < 4$

$3 + \dots = \dots$

$3 = \dots - 1$

$5 > 4$

$5 = \dots$

$\dots = 4$

$2 < 3$

$\dots = 3$

$2 = \dots$

$3 > 2$

$3 = \dots$

$\dots = 2$

3. VÕRDLE.

$3 \dots 3$

$5 \dots 2$

$4 \dots 5$

$4 \dots 3$

$2 \dots 1$

$5 \dots 5$

$5 \dots 4$


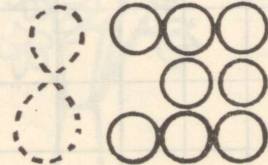





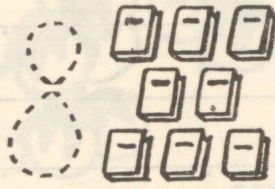
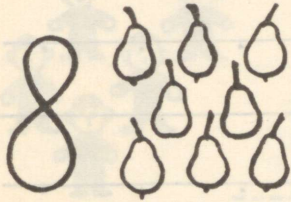

$3 \dots 4$

$4 \dots 3$

$5 \dots 3$

$3 \dots 4$

$4 \dots 4$






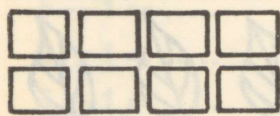

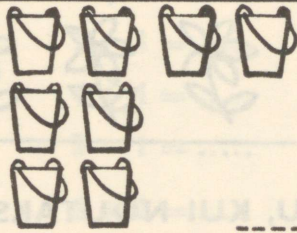





8 8 8 8 8 8 8 8 8 8

8 . . . . .


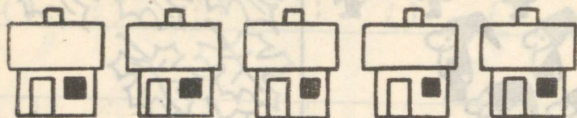
8 . . . . .

8 . . . . .

8	8																		
8																			
3																			
5																			
2																			



1. JOONISTA JUURDE NII PALJU, ET IGAS REAS OLEKS 8.

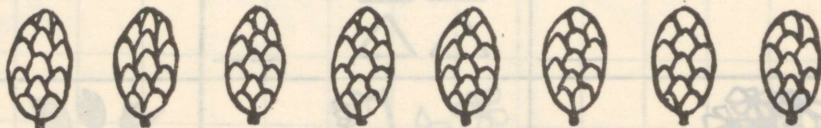


2. VÄRVI NII PALJU, KUI NÕUTAKSE.

7



6



5



MITU ON VÄRVIDUD? MITU ON VÄRVMATA?



### 1. LEIA PUUDUVAD ARVUD.

$1 + \dots = 8$

$5 + \dots = 8$

$8 = 7 + \dots$

$2 + \dots = 8$

$6 + \dots = 8$

$8 = 5 + \dots$

$3 + \dots = 8$

$7 + \dots = 8$

$8 = 6 + \dots$

$4 + \dots = 8$

$3 + \dots = 8$

$8 = 4 + \dots$

### 2. ARVUTA.

$1 + 1 = \dots$

$3 + 1 = \dots$

$5 + 1 = \dots$

$8 - 1 = \dots$

$7 - 1 = \dots$

$6 - 1 = \dots$

$2 + 1 = \dots$

$4 + 1 = \dots$

$6 + 1 = \dots$

$4 - 1 = \dots$

$3 - 1 = \dots$

$2 - 1 = \dots$

### 3. $7 + 1 = \dots$

$6 + 2 = \dots$

$1 + 7 = \dots$

$5 - 1 = \dots$

$8 - 2 = \dots$

$7 + 1 = \dots$

$2 + 1 = \dots$

$5 + 3 = \dots$

$6 + 2 = \dots$

$3 - 1 = \dots$

$8 - 3 = \dots$

$2 + 6 = \dots$

### 4. VÖRDLE.

$8 > 7$

$4 = 8$

$8 < 3$

$6 = 8$


$5 = 8$

$8 = 8$

$6 < 4$

$8 = 7$

# 1. KOOSTA IGA JOONISE JÄRGI 4 VÖRDUST.



$7 + 1 = \dots$

$1 + 7 = \dots$

$8 - 1 = \dots$

$8 - 7 = \dots$

$\dots = \dots$

$\dots = \dots$

$\dots = \dots$

$\dots = \dots$



$\dots = \dots$

$\dots = \dots$

$\dots = \dots$

$\dots = \dots$

$\dots = \dots$

$\dots = \dots$

$\dots = \dots$

$\dots = \dots$

2.  $5 + 2 = \dots$

$2 + 5 = \dots$

$7 - 2 = \dots$

$7 - 5 = \dots$

$5 + 1 = \dots$

$1 + 5 = \dots$

$6 - 1 = \dots$

$6 - 5 = \dots$

$1 + 2 = \dots$

$2 + 1 = \dots$

$3 - 2 = \dots$

$3 - 1 = \dots$

3.  $4 + 4 = \dots$

$1 + 4 = \dots$

$5 - 1 = \dots$

$5 - 4 = \dots$

$3 + 1 = \dots$

$1 + 3 = \dots$

$4 - 1 = \dots$

$4 - 3 = \dots$

$2 + 3 = \dots$

$3 + 2 = \dots$

$5 - 3 = \dots$

$5 - 2 = \dots$

4.  $1 + 7 = \dots$

$7 + 1 = \dots$

$8 - 1 = \dots$

$8 - 3 = \dots$

$3 + 5 = \dots$

$5 + 3 = \dots$

$8 - 2 = \dots$

$8 - 4 = \dots$

$2 + 6 = \dots$


$6 + 2 = \dots$

$8 - 6 = \dots$

$8 - 5 = \dots$



9



9

9




9



9



9



9



9




9




9





9



9



9



9 9 9 9 9 9 9 9 9 9


9

9

9

9	9																		
9																			
8																			
6																			
5																			

JOONISTA JUURDE NII PALJU, ET IGAS REAS OLEKS 9.





1.  $1 + \dots = 9$

$4 + \dots = 9$

$7 + \dots = 9$

$2 + \dots = 9$

$5 + \dots = 9$

$8 + \dots = 9$

$3 + \dots = 9$

$6 + \dots = 9$

2.  $7 + 2 = \dots$

$6 + 2 = \dots$

$3 + 3 = \dots$

$4 + 3 = \dots$

$8 + 1 = \dots$

$2 + 2 = \dots$

$3 + 2 = \dots$

$2 + 4 = \dots$

$4 + 4 = \dots$

3. VÖRDLE.

$3 < 5$

$8 \dots 6$

$6 \dots 9$

$5 \dots 9$

$9 \dots 8$

$8 \dots 3$

$2 \dots 3$

$9 \dots 5$

$7 \dots 4$

$7 \dots 5$

$8 \dots 3$

$6 \dots 8$

4.  $9 - 1 = \dots$

$9 - 2 = \dots$

$9 - 8 = \dots$

$9 - 4 = \dots$

$9 - 5 = \dots$


$9 - 3 = \dots$

$9 - 8 = \dots$


$9 - 6 = \dots$

$9 - 7 = \dots$

5.



# 1. KOOSTA IGA JOONISE JÄRGI 4 VÕRDUST.



$8 + 1 = \dots$

$\dots = \dots$

$1 + 8 = \dots$

$\dots = \dots$

$9 - 1 = \dots$

$\dots = \dots$

$9 - 8 = \dots$

$\dots = \dots$



$\dots = \dots$

$\dots = \dots$

$\dots = \dots$

$\dots = \dots$

$\dots = \dots$

$\dots = \dots$

$\dots = \dots$

$\dots = \dots$

2.  $7 + 2 = \dots$

$8 + \dots = 9$

$9 - 1 = \dots$

$3 + 6 = \dots$

$6 + \dots = 9$

$9 - 4 = \dots$

$5 + 3 = \dots$

$7 + \dots = 9$

$9 - 6 = \dots$

$5 + 4 = \dots$

$5 + \dots = 9$

$9 - 5 = \dots$

3.  $7 + 1 = \dots$

$8 - 1 = \dots$

$8 + 1 = \dots$

$4 - 1 = \dots$

$6 - 1 = \dots$

$9 - 1 = \dots$

$5 + 1 = \dots$

$6 + 1 = \dots$


$7 - 1 = \dots$


$9 - 1 = \dots$

$5 - 1 = \dots$


$4 + 1 = \dots$

4.






10




10


10



10




10




10




10



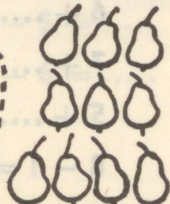
10



10




10



10




10



10





10






JOONISTA IGASSE RITTA NII PALJU, KUI NÕUTAKSE.


8 


6 

4 


3 


5 

7 


9 

1 

2 

10 

1.



2. KOOSTA IGA JOONISE JÄRGI 4 VÖRDUST.

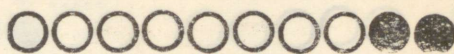


$9 + 1 = \dots$

$1 + 9 = \dots$

$10 - 1 = \dots$

$10 - 9 = \dots$



$\dots = \dots$

$\dots = \dots$

$\dots = \dots$

$\dots = \dots$



$\dots = \dots$

$\dots = \dots$

$\dots = \dots$

$\dots = \dots$



$\dots = \dots$

$\dots = \dots$

$\dots = \dots$

$\dots = \dots$

3. VÖRDLE.

$9 < 10$

$8 \dots 7$

$9 \dots 8$

$7 \dots 10$

$10 \dots 9$

$10 \dots 8$

$8 \dots 3$

$10 \dots 6$

$7 \dots 8$

$8 \dots 10$

$10 \dots 7$

$5 \dots 10$

4. KOOSTA IGA VÖRRATUSE JÄRGI 2 VÖRDUST.

$10 > 9$

$8 > 7$

$7 > 6$

$10 = 9 + \dots$

$8 = \dots + \dots$


$7 = \dots + \dots$

$10 - \dots = 9$

$\dots - \dots = 7$

$\dots - \dots = 6$

# KOOSTA IGA JOONISE JÄRGI 4 VÕRDUST.




$$6 + 4 = \dots$$

$$\dots + \dots = \dots$$

$$\dots - \dots = \dots$$

$$\dots - \dots = \dots$$

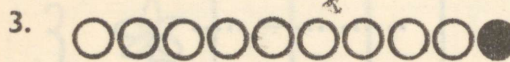


$$\dots = \dots$$

$$\dots = \dots$$

$$\dots = \dots$$

$$\dots = \dots$$

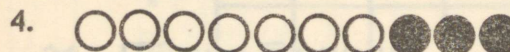


$$\dots = \dots$$

$$\dots = \dots$$

$$\dots = \dots$$

$$\dots = \dots$$

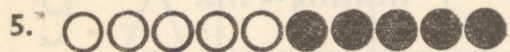


$$\dots = \dots$$

$$\dots = \dots$$

$$\dots = \dots$$

$$\dots = \dots$$



$$\dots = \dots$$

$$\dots = \dots$$

## 6. ARVUTA.

$3 + 1 = \dots$

$9 - 1 = \dots$

$6 + 1 = \dots$

$6 - 1 = \dots$

$2 + 1 = \dots$

$5 - 1 = \dots$

$4 - 1 = \dots$

$8 + 1 = \dots$

$9 + 1 = \dots$

$6 + 1 = \dots$

$7 - 1 = \dots$

$8 - 1 = \dots$

# KOOSTA IGA JOONISE JÄRGI 4 VÕRDUST.



$7 + 3 = \dots$

$10 - 3 = \dots$

$3 + 7 = \dots$

$10 - 7 = \dots$



.....  
.....

.....  
.....

3.  $6 + 4 = \dots$

$5 + 4 = \dots$

$4 + 3 = \dots$

$4 + 6 = \dots$

$4 + 5 = \dots$

$3 + 4 = \dots$

$10 - 4 = \dots$

$9 - 4 = \dots$

$7 - 3 = \dots$

$10 - 6 = \dots$

$9 - 5 = \dots$

$7 - 4 = \dots$

4.  $8 + 1 = \dots$

$7 + 1 = \dots$

$9 + 1 = \dots$

$9 - 1 = \dots$

$6 - 1 = \dots$

$8 - 1 = \dots$

$9 + 1 = \dots$

$10 - 1 = \dots$

$4 + 1 = \dots$

$10 - 1 = \dots$

$6 + 1 = \dots$

$5 - 1 = \dots$

5.  $10 > 9$

$9 \dots 10$

$10 > \dots$

$8 \dots 9$

$7 \dots 6$

$6 < \dots$

$6 \dots 5$



$5 \dots 6$

$4 = \dots$



6.  $1 < 2 < 3$     4    5    6    7    8    9    10

$10 > 9 > 8$     7    6    5    4    3    2    1











1 KOP.	1 KOP.	1 KOP.	1 KOP.	1 KOP.
1 KOP.	1 KOP.	1 KOP.	1 KOP.	1 KOP.
10 KOP.	10 KOP.	10 KOP.	10 KOP.	10 KOP.

2 KOP.	2 KOP.	2 KOP.	2 KOP.	2 KOP.
3 KOP.	3 KOP.	3 KOP.	5 KOP.	5 KOP.
20 KOP.	20 KOP.	50 KOP.	50 KOP.	1 RUBLA



1 KOP.	1 KOP.	1 KOP.	1 KOP.	1 KOP.
1 KOP.	1 KOP.	1 KOP.	1 KOP.	1 KOP.
10 KOP.	10 KOP.	10 KOP.	10 KOP.	10 KOP.

2 KOP.	2 KOP.	2 KOP.	2 KOP.	2 KOP.
3 KOP.	3 KOP.	3 KOP.	5 KOP.	5 KOP.
20 KOP.	20 KOP.	50 KOP.	50 KOP.	1 RUBLA



0	1	2	3	4
5	6	7	8	9
+	+	=	=	<

0	1	2	3	4
5	6	7	8	9
-	-	=	=	>



0	1	2	3	4
5	6	7	8	9
+	+	=	=	<




0	1	2	3	4
5	6	7	8	9
-	-	=	=	>







0	1	2	3	4	5	6	7	8	9	10
10	9	8	7	6	5	4	3	2	1	0







16 kop.

Kontrollleke

A-29947

TÜ RAAMATUKOGU



1 0300 00410770 4